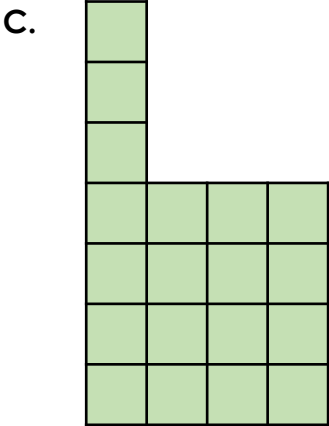
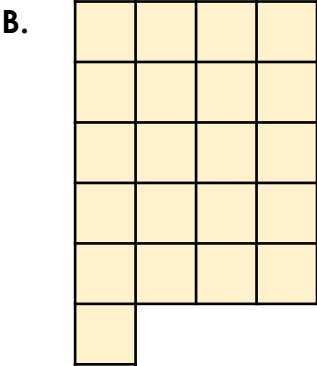
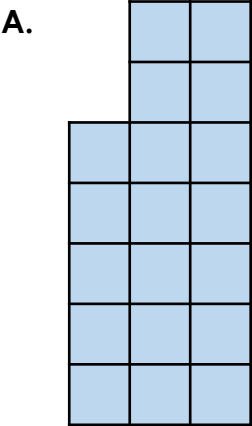


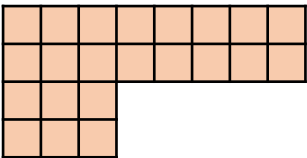
Counting Squares

4. Count the squares in the shapes below to find the odd one out. Circle your answer.

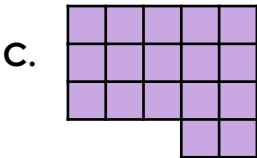
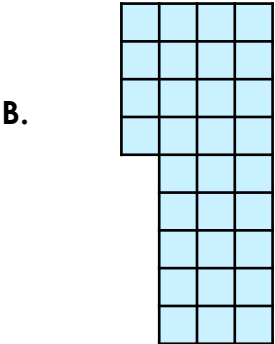
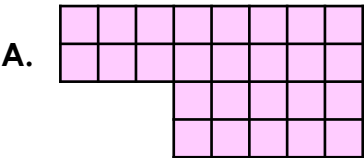


VF  
HW/Ext

5. Tick the shape that will make the statement correct.



>



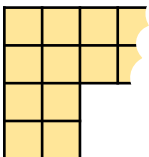
VF  
HW/Ext

6. Harrison and Layla have each made a 6-sided, rectilinear shape. They are discussing the areas of their starting shapes after the paper was accidentally ripped!



Harrison

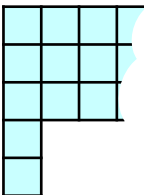
My paper had the largest area because it was 1 square wider shape than Layla's.



My paper had the largest area because it has an area of 23.



Layla



Who is correct? Convince me.



RPS  
HW/Ext